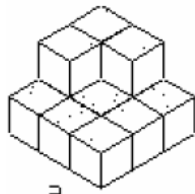
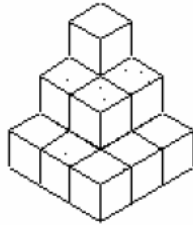
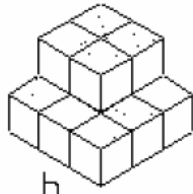


Pratique:

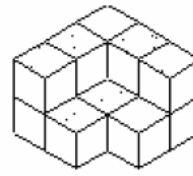
a) Descubra a parte que falta para completar o cubo.



a

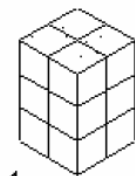


b

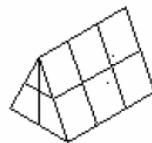


c

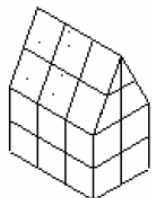
b) Qual dos sólidos abaixo obtemos juntando 1 e 2?



1



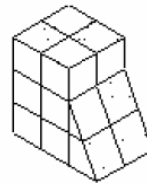
2



a



b



c

